
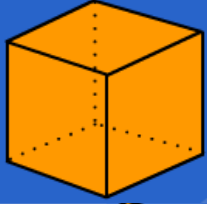
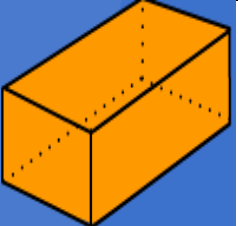
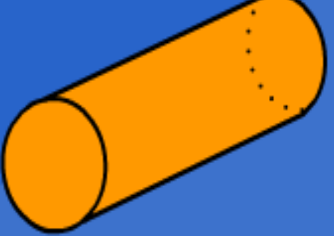

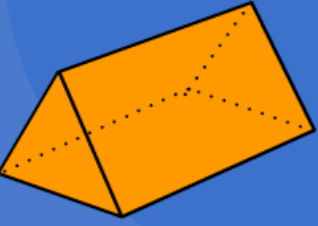
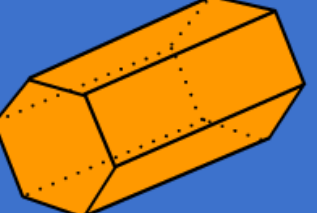


Name:.....

04.02.21

LO: Identify the faces of 2-D shapes on the surface of 3-D shapes.

triangular prism	cone	cuboid	Hexagonal prism
cube	cylinder	square-based pyramid	

3-D Shape	Name of 3-D Shape	Faces
		_____ _____
		_____ _____
		_____ _____
		_____ _____
		_____ _____
		_____ _____
		_____ _____

Extension: Can you find any objects in your home which are one of these 3D shapes?
You might see something which is made up of two or three 3D shapes put together.