

LO: Solve problems involving making totals and counting an amount

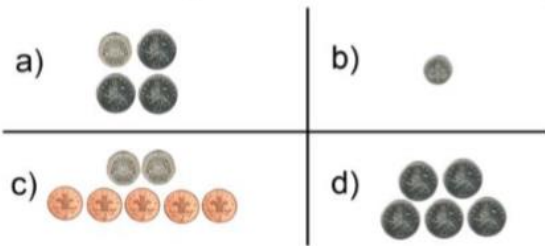
Circle 56p



Match the amounts.



Which does **not** show 50p?



Complete the part whole models.

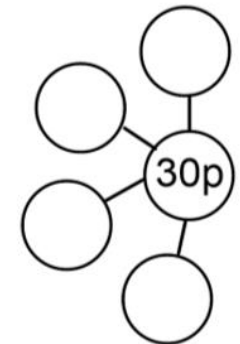
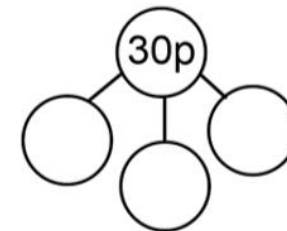
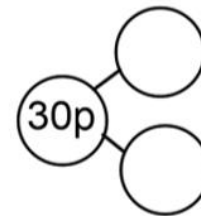
Draw money on the purses to match the amount.



£2 and 32p




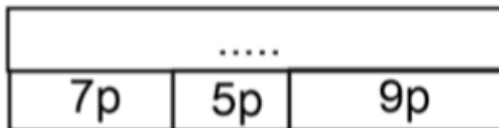
£1 and 40p



Complete the table.

Pounds	Pence	Total
£4	25 pence	£ ___ and ___ p
£2		£2 and 40p
	65p	£20 and 65 pence
		£15 and 20p
	55 pence	

Find the total of the bar models.



Jackson buys bread and milk.



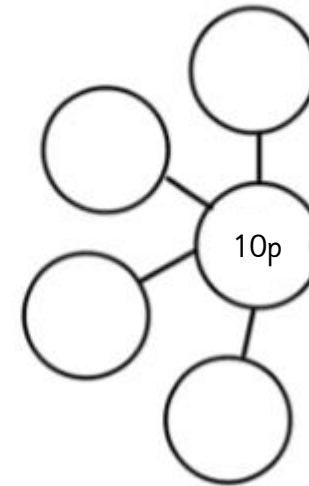
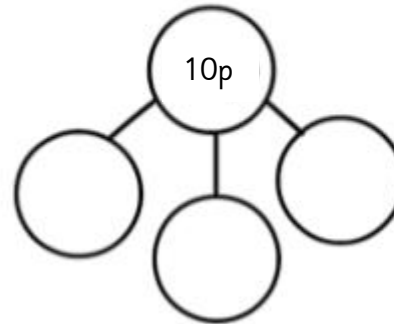
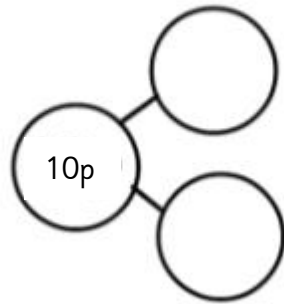
How much does he spend?

Here is a shopping list.

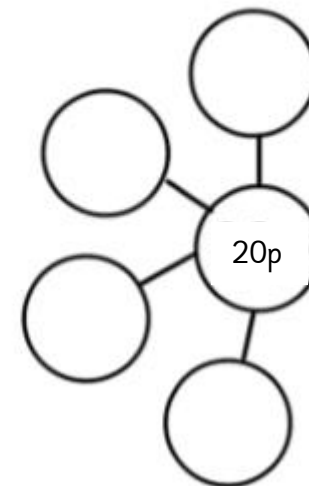
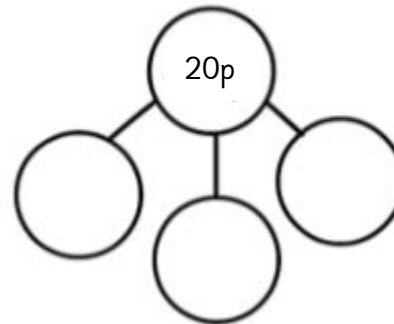
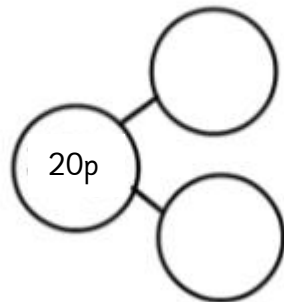
Items	Price
Rubber	20p
Ruler	18p
Pencil	32p
Crayon	27p
Pen	45p
Glue	36p

- I spend exactly 50p. Which two items did I buy?
- I bought two of the same item and it cost me 90p. What was the item?

Complete the part whole models.



Complete the part whole models.



Extension: I can make 46p using only silver coins. True or false? Explain your answer.

