

3/12/21 Year 1 Arithmetic Homework

Name the 2-D shape.

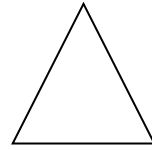

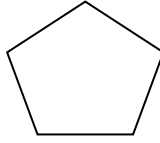

triangle

circle

square

pentagon

rectangle



Challenge

How many sides and corners does each shape have?

Extra challenge

See how many of these shapes you can find around your home.