

10/12/21 Year 1 Arithmetic Homework

Name the 3-D shapes.

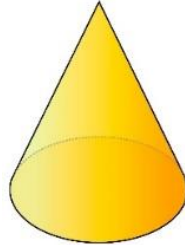
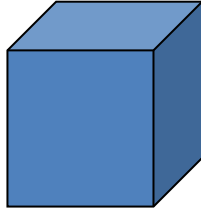

sphere

cone

cylinder

cube

cuboid



Challenge

Try to find as many of these 3-D shapes around your house as possible.

How many faces does each shape have?

Can you spot the 2-D shape on each of the faces on the 3-D shapes?